

शीतकालीन अवकाश

03.12.2021-21.01.2022

कक्षा - द्वितीय

प्रश्न 1 अपनी पाठ्य -पुस्तक में से पाँच सुलेख
लिखो।

प्रश्न 2 टेसू राजा बीच बाज़ार

सूरज जल्दी आना जी

दोनों कविताएँ कंठस्थ करो (याद करो)

प्रश्न 3 टेसू राजा बीच बाज़ार

बस के नीचे बाघ

तेंदुए की खबर

बाघ का बच्चा

सूरज जल्दी आना जी

सभी पाठों को याद करो।

प्रश्न 4 भेजे गए कार्यपत्र (worksheets) को अपनी
उत्तर पुस्तिका में लिखो ।

Happy Holidays

Happy Christmas

Happy New year 2022

1. कविता की पंक्तियां पूरी कीजिए
जमकर बैठा यहां _____
आर पार न _____ है
ऐसे भी क्या कभी किसी के _____ में कोई टिकता है
_____ जरा बताना जी
_____ जल्दी आना जी

2. प्रश्नों के सही विकल्प पर निशान लगाइए और उत्तर लिखिए।

- कविता में बच्चा किसे जल्दी आने के लिए कह रहा है?(गर्मी को/ बारिश को /सूरज को /सर्दी को)

•

- सूरज को क्या छोड़ने के लिए कहा गया है?(धूप/ बहाना/ रोशनी/ गर्मी)

•

- जमकर कौन बैठ गया है ?(वर्षा/धूप/कुहासा/पानी)

•

- बच्चा सूरज से कैसी धूप लाने के लिए कह रहा है?(लाल /गोरी/ काली/ पीली)

3. तुकांत शब्द लिखिए:-

- गोरी -----

- गीले -----

- बहाना -----

- बताना -----

2. नीचे दी गई निम्नलिखित पशुओं अथवा जानवरों में से पालतू और जंगली जानवरों के नाम लिखिए।
(हाथी, बिल्ली, घोड़ा ,बकरी, भेड़िया ,बैल, शेर, कुत्ता, लोमड़ी, बाघ, भैंस, ऊँट)

पालतू पशु

जंगली जानवर

3. उल्टे अर्थ वाले शब्दों को मिलाओ।

- | | |
|---------|-------|
| ● भीतर | पिछले |
| ● अगले | चढ़ना |
| ● साफ | बाहर |
| ● उतरना | बायाँ |
| ● दायाँ | गंदा |

Sub. Tr. - Indrajit

Holiday assignment English fourth class

Question 1. fill in the blank's with adjectives. (5m)

- A. Rajat went for a walk on a _____ day.
- B. Rabbits are _____ animals.
- C. Ravi could not study because of the music was too _____.
- D. The tree near my house is _____.
- E. Her doll is _____.

Question 2. underline the nouns in the following sentences (5m)

- A. We saw a monkey sitting on the road.
- B. Sushma forget her Jacket in the bus.
- C. The gardener cut off all the dead roses.
- D. Mr Sood Has two watches.
- E. Mohan goes to village by bus.

Question 3. create a story, with the following beginning and complete it in 75 to 80 word .(10 m)

Story

Once upon a time an old wise man lived with _____

Question 4. Read a news paper daily and find out 5 new words every day and also write their meaning.

Question 5. Learn all the chapters from haiwatha to poem books.

KENDRIYA VIDYALAYA DPS KISTWAR

WINTER VACATIONS WORK

CLASS- 2 SUBJECT - ENGLISH

1. *Write and recite the following poems-*
 - a. *Funny bunny*
 - b. *On my blackboard I can draw*
2. *How many words can you make using letters from the word HNOYEMNOYKETE A?*
3. *Write the name of different fruits and vegetables found around you and draw the picture of those fruits and vegetables.*
4. *Write the name of months in a year. You can begin with January.*
5. *Collect 10 flowers, dry them , paste in the notebook with the help of cello-tap and also write their names.*
6. *Write the name of trees around your home.*

By

SANJEEV SINGH DAHLIA

HOLIDAYS HOMEWORK

CLASS 2ND SUBJECT MATHS

Q1 Write and learn tables from 2 to 10.

Q2. Add these numbers :-

1)	$\begin{array}{r} 658 \\ + 407 \\ \hline \end{array}$	2)	$\begin{array}{r} 343 \\ + 489 \\ \hline \end{array}$	3)	$\begin{array}{r} 753 \\ + 864 \\ \hline \end{array}$	4)	$\begin{array}{r} 529 \\ + 866 \\ \hline \end{array}$
5)	$\begin{array}{r} 427 \\ + 130 \\ + 216 \\ \hline \end{array}$	6)	$\begin{array}{r} 374 \\ + 241 \\ + 48 \\ \hline \end{array}$	7)	$\begin{array}{r} 571 \\ + 78 \\ + 342 \\ \hline \end{array}$	8)	$\begin{array}{r} 378 \\ + 254 \\ + 163 \\ \hline \end{array}$
9)	$\begin{array}{r} 703 \\ + 255 \\ + 106 \\ \hline \end{array}$	10)	$\begin{array}{r} 471 \\ + 250 \\ + 68 \\ \hline \end{array}$	11)	$\begin{array}{r} 683 \\ + 231 \\ + 157 \\ \hline \end{array}$	12)	$\begin{array}{r} 327 \\ + 261 \\ + 78 \\ \hline \end{array}$
13)	$\begin{array}{r} 475 \\ + 238 \\ + 314 \\ \hline \end{array}$	14)	$\begin{array}{r} 628 \\ + 483 \\ + 326 \\ \hline \end{array}$	15)	$\begin{array}{r} 785 \\ + 427 \\ + 389 \\ \hline \end{array}$	16)	$\begin{array}{r} 819 \\ + 434 \\ + 286 \\ \hline \end{array}$
17)	$\begin{array}{r} 765 \\ + 326 \\ + 471 \\ \hline \end{array}$	18)	$\begin{array}{r} 627 \\ + 198 \\ + 56 \\ \hline \end{array}$	19)	$\begin{array}{r} 946 \\ + 462 \\ + 317 \\ \hline \end{array}$	20)	$\begin{array}{r} 599 \\ + 326 \\ + 478 \\ \hline \end{array}$

Q3 SUBTRACTION:-

Subtraction

$$\begin{array}{r} 126 \\ - 31 \\ \hline \end{array}$$

$$\begin{array}{r} 357 \\ - 46 \\ \hline \end{array}$$

$$\begin{array}{r} 248 \\ - 69 \\ \hline \end{array}$$

$$\begin{array}{r} 446 \\ - 48 \\ \hline \end{array}$$

$$\begin{array}{r} 242 \\ - 45 \\ \hline \end{array}$$

$$\begin{array}{r} 548 \\ - 73 \\ \hline \end{array}$$

$$\begin{array}{r} 671 \\ - 86 \\ \hline \end{array}$$

$$\begin{array}{r} 304 \\ - 47 \\ \hline \end{array}$$

$$\begin{array}{r} 650 \\ - 301 \\ \hline \end{array}$$

$$\begin{array}{r} 355 \\ - 175 \\ \hline \end{array}$$

$$\begin{array}{r} 404 \\ - 138 \\ \hline \end{array}$$

$$\begin{array}{r} 372 \\ - 107 \\ \hline \end{array}$$

$$\begin{array}{r} 544 \\ - 239 \\ \hline \end{array}$$

$$\begin{array}{r} 743 \\ - 554 \\ \hline \end{array}$$

$$\begin{array}{r} 416 \\ - 118 \\ \hline \end{array}$$

$$\begin{array}{r} 646 \\ - 350 \\ \hline \end{array}$$

Calculate each product.

$$\begin{array}{r} 34 \\ \times 5 \\ \hline \end{array}$$

$$\begin{array}{r} 93 \\ \times 3 \\ \hline \end{array}$$

$$\begin{array}{r} 56 \\ \times 7 \\ \hline \end{array}$$

$$\begin{array}{r} 47 \\ \times 2 \\ \hline \end{array}$$

$$\begin{array}{r} 68 \\ \times 6 \\ \hline \end{array}$$

$$\begin{array}{r} 38 \\ \times 3 \\ \hline \end{array}$$

$$\begin{array}{r} 98 \\ \times 7 \\ \hline \end{array}$$

$$\begin{array}{r} 31 \\ \times 3 \\ \hline \end{array}$$

$$\begin{array}{r} 60 \\ \times 6 \\ \hline \end{array}$$

$$\begin{array}{r} 32 \\ \times 8 \\ \hline \end{array}$$

$$\begin{array}{r} 20 \\ \times 2 \\ \hline \end{array}$$

$$\begin{array}{r} 61 \\ \times 6 \\ \hline \end{array}$$


$$\begin{array}{r} 78 \\ \times 7 \\ \hline \end{array}$$

$$\begin{array}{r} 21 \\ \times 7 \\ \hline \end{array}$$

$$\begin{array}{r} 69 \\ \times 9 \\ \hline \end{array}$$

$$\begin{array}{r} 66 \\ \times 2 \\ \hline \end{array}$$

KENDRIYA VIDYALAYA KISHTWAR



HOLIDAYS HOME WORK

Subjects	Homework
Class II A & B EVS	<ol style="list-style-type: none">1) Learn and write States and their capitals.2) Learn and write q/ans related to national symbols in your EVS notebook.3) Learn and write q/ans of chapter "Our Earth".4) Draw a picture of our solar system on a A4 size paper and paste in your notebook.5) Paste your photos in scrap book or notebook while washing your hands , wearing mask , watering plants , playing indoor games and any other activity.
Class IV A & B EVS	<ol style="list-style-type: none">1) Learn and write states and their capitals.2) Learn and write the given worksheet of Ch " Basva's form " Ch " From market to home " Ch " Too much water ,too little water "3) Make a chart on "Save Water".4) 6) Paste your photos in scrap book or notebook while washing your hands , wearing mask , watering plants , playing indoor games and any other activity.5) Learn and write q/ans related to national symbols in your EVS notebook.

Subject Teacher
Rudesh
22/12/2021

KENDRIYA VIDYALAYA DPS KISHTWAR

CLASS- 1

SUBJECT- ENGLISH

WINTER VACATION HOME WORK (2021-22)

- 1) MAKE A FACE MASK OF ANY TWO PET ANIMALS OR BIRDS.
- 2) READ AND LEARN THE POEM "ONE LITTLE KITTEN".
- 3) WRITE ANY 20 ACTION WORDS OF YOUR DAILY ROUTINE LIFE AND LEARN THEM.

TEACHER – SHIVANI (PRT)

Kendriya Vidyalaya DPS Kishtwar

Winter Break Holiday Homework

Class - 1

Subject – Mathematics

1. Learn number names from 1 to 30.
2. Learn tables of 2,3,4 and 5.
3. Write 3 activities for each of the following which you perform during a day.
 - i) Morning –
 - ii) Afternoon –
 - iii) Evening –
 - iv) Night –
4. Write your daily routine.
5. Do 10 sums of each addition and subtraction.

CLASS - III

ENGLISH, EVS

KENDRIYA VIDYALAYA DPS KISHTWAR

WINTER VACATIONS HOLIDAYS HOMEWORK

Class - III (Session – 2021 – 2022)

ENGLISH HOLIDAYS HOMEWORK

- WRITE A PAGE OF GOOD HANDWRITING IN YOUR ENGLISH NOTEBOOK DAILY.
- WRITE DOWN YOUR EXPERIENCES WITH YOUR FAMILY MEMBERS DURING WINTER BREAK.
- READ THE CHAPTER – HE IS MY BROTHER, THE SHIP OF DESERT , FIND OUT DIFFICULT WORDS AND THEIR MEANINGS ALSO.
- READ NEWSPAPER DAILY AND FIND OUT ANY FIVE NEW WORDS EVERYDAY AND LEARN THEM .

EVS HOLIDAYS HOMEWORK

- PASTE 5 PICTURES OF HEALTHY FOOD AND 5 PICTURES OF JUNK FOOD IN YOUR SCRAP BOOK.
- PREPARE A MODEL ON SAVE EARTH, SAVE LIFE.
- PREPARE MASKS OF ANY 2 ANIMALS.
- OBSERVE ANY 3 ANIMALS IN YOUR SURROUNDINGS AND DRAW THEM
- MAKE TWO USEFUL ITEMS FROM WASTE MATERIALS

Work Assigned by :
Seema (PRIMARY TEACHER)

केंद्रीय विद्यालय डी पी एस किशतवाड़

हिन्दी गृह कार्य

1. अपनी पुस्तक में से साफ़-साफ़ लिखाई में 5 सुलेख लिखिए।
2. किन्हीं भी 5 पाठों में से छांट कर नुक्ता वाले शब्द लिखिए।
3. कविता पढ़ककू की सूझ में आए सभी तुक वाले शब्द छांट कर लिखिए।
4. दिव्यांग व्यक्तियों के लिए होने वाले पैरा ओलम्पिक के बारे में जानकारी एकत्रित कर एक छोटा अनुच्छेद लिखें व इसमें खेले जाने वाले 5 खेलों की सूची बनाएं।

NISHA

4-A

Hindi

Kendriya vidyalaya DPS Kishtwar

Class 1- EVS

Holidays Homework

1. Draw 5 vegetables and 5 fruits and write their names neatly.
2. Make a list of 10 junk food items.
3. Write 10 wild animals and 10 pet animals names.
4. Make a beautiful drawing of 'My House'.
5. Write 10 good habits.

For example - we should wake up early in the morning

Nishu
I
EVS




WHO WILL DO THIS WORK

- ❖ All kinds of labour must be considered respectfully
- ❖ No work should be considered dirty or low.
- ❖ Many people help us to keep our neighbourhood green and clean.
- ❖ None of us can do all work by ourselves.
- ❖ Different people do different kinds of work.
- ❖ Mahatma Gandhi regarded all the work equally important.

Answer the following:

1. What is meant by dignity of labour?



The respect given to all kinds of labour is known as dignity of labour.

2. What is division of labour?




4. What is work?

Work is a job that a person does mostly in order to earn money.

5. We should not be ashamed to any work. Comment

Work is worship and no work is high or low. So we should not be ashamed do any work.

6. Who were untouchables?



In our society who do menial work have been regarded as lowly and were placed the lowest level of the social ladder. They were called as untouchables. Gandhiji named untouchables as Harijans, Harijans means people of God.


7. Does untouchability still exist in India?

No, untouchability has been abolished in our country. It is now a punishable offence.

8. What are called essential services?

The services that we depend upon whom or we need every day in a society are called essential services.

9. Write few lines about the great soul Mahatma Gandhiji.



- Mahatma Gandhiji was an extraordinary person.
- He was the undisputed leader of the Indian freedom movement.
- He was a person who practiced what he preached.
- Gandhi wanted us to honour and respect all occupations.
- He did not feel shy to do any work. He used to spin cotton for his own clothes.
- He also cleaned toilets because he wanted to change the attitude of the people towards the so called dirty work.
- He opposed against untouchability and discrimination against people who did menial jobs.

How do we depend on essential services?

We all are dependent on one another to provide essential services needed in a society. None of us can do all the work by ourselves. Different people do different work so we should never look down others work.

After Indians freedom, under whose leadership was the constitution prepared? Dr. BhimRao Baba sahib Ambedkar.



12. Who was Dr. BhimRaoSahebAmbedkar? What did he become famous for ?


Dr. BhimRao Saheb Ambedkar was an eminent leader, social reformer, scholar.

Dr. BhimRao Saheb Ambedkar was famous for framing Indian constitution.



Different people do different kinds of work. This is called division of labour.

3. How should you treat the people who help you?
We should treat the people as our equal.



BLOW HOT BLOW COLD

KEY POINTS

- ↓ We are constantly taking in air and giving out air from our Nose.
- ↓ All Animals and Humans breath in oxygen rich air and breathe out carbon dioxide rich air during the process of breathing.
- ↓ We need Oxygen to live. It is found in the air around us. Oxygen is needed to breakdown digested food.

Answer the following

Give reason:

1. We breathe out clouds of mist from our mouth on a cold day.



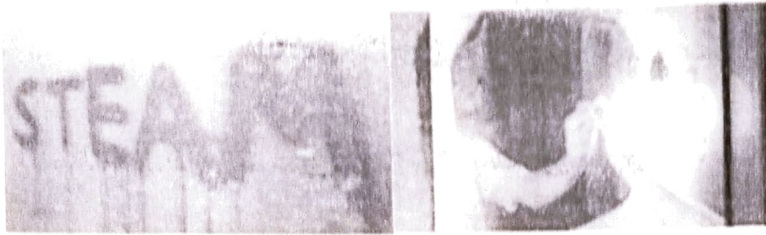
When we breathe out, water vapour in our breath condenses as it comes in contact with the cold air of the atmosphere and mist is formed.

2. How does our breath help to warm our hands in winter?



In winter our hands become very cold. We open our mouth wide and blow on to our hands the warm, moist air inside our mouth. The steam of our breath makes our hands warm in winter.

3. Why do we see drops of water in our bathroom mirror, while taking hot water bath?



From the hot water, water vapour rises up and condenses on the cool surface of the mirror and forms water drops.

4. Why does hot milk become cool when we blow our air from our mouth?



The water vapour in the air we breathe out makes the heat coming out of the hot milk or soup escape faster. We often blow air with our lips puckered to cool a hot cup of milk or soup.

5. Why do we blow at a burning fire?



When we blow at a burning fire, the fire burns better because our breath contains more oxygen.

6. Explain the following terms.

- i. Breathing
- ii. Inhaling
- iii. Exhale

Breathing



Breathing is an activity that we do through out our lives. We start breathing right from the moment, we are born and continue doing so till we die. It is a process that continues automatically. We breathe even when we are sleeping. Breathing is a natural process of inhaling oxygen and exhaling carbon dioxide.

Inhaling



When we breathe in, our lungs expand and take in oxygen into the body.

Exhale



When we breathe out, the lungs contract and remove carbon dioxide.

7. Describe an activity to show that the air we breathe out contains water vapour.



When we stand in front of a mirror we see our image. And when we breathe out air over the surface of the

mirror we could notice that our image gets blurred. This is because of the water vapour in the air we breathe out. This water vapour condenses on the cool surface of the mirror. So we say that the air we breathe out contains water vapour.

8. Does the breathing rate change with our activities?



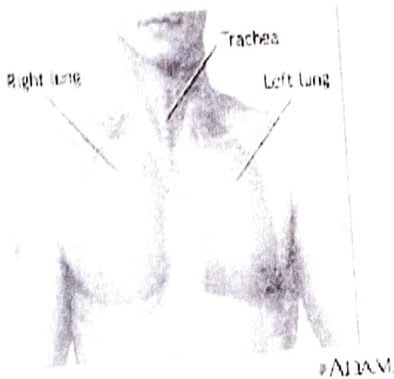
Yes, the rate of breathing is directly related to the kind of activities a person does. When a person is asleep or resting the rate of breathing becomes slow because the body does not require too much of energy and oxygen. when a person exercises, the breathing rate increases as the body requires more energy and oxygen.

9. What is a Stethoscope?



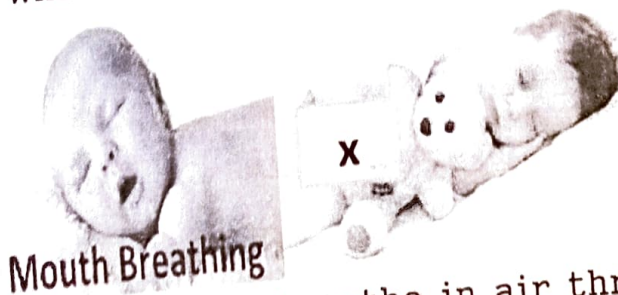
A Stethoscope is an instrument used by a doctor to listen to the sound of our heart beat and our breathing.

10. Draw and Explain: Lungs of Respiratory system



The air we breathe in contains oxygen which we need to live. The body produces waste materials such as carbon dioxide and watervapour. The wastes are thrown out from the body through the air we breathe out. Air that enters our body through the nose, passes through the windpipe and finally reaches the lungs located inside our chest. Inside the lungs, the blood takes in the oxygen and gives our carbondioxide and watervapour or water.

11. What is the correct way of breathing?



Always breathe in air through the nose not from the mouth.
Never sleep with your face covered because the same air you are inhaling again and again.
Practice yoga and Pranayama. This helps in reducing stress.


WHEN THE EARTH SHOOK

KEY POINTS

1. Natural calamities occur due to unpredictable changes in nature that are beyond human control.
2. Natural calamities cause large scale destruction of life and property.
3. Earthquakes and tsunamis result from movement under the earth's crust.
4. Many people die and are rendered homeless during such disaster.

Answer the Following:


Q 1. What is an earthquake ?



An earthquake is a sudden shaking of the ground caused by movement or vibration deep inside earth. Earthquakes can be mild or severe.

Q2. What are natural disasters?

Tsunami Earthquake



Land Slide



Lightning



Volcanic eruption



Cyclone



Tornado



Forest Fire



A natural disaster is a terrible event that is caused by the forces of nature and brings with it destruction, pain and sufferings.

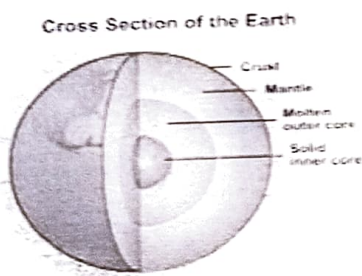
Examples: Flood, Earthquake, hurricane, lightning, tsunami, volcanoes, drought, Forest fire etc..

Q3. How do earthquakes affect the earth and its people?



- *Severe earthquakes cause collapse of buildings and bridges burying everything under the earth.*
- *Earthquake in hilly area can cause landslide.*
- *Many people die and are rendered homeless during earthquakes*

Q4. What causes earthquake?



The outermost layer of our earth called the crust consists of hot rocks called the mantle. The core is the innermost layer of earth. It is made up of hot molten materials. The core is not in a stable state. A lot of movement is going on inside it. The moving land masses sometimes bump against each other. These bumps make land shake, resulting in earthquakes.

Q5. What should you do when there is an earthquake?



- ▶ We must run out of the building and move to an open area.
- ▶ Stay away from electric poles and trees
- ▶ Take refuge under a table to protect ourselves from falling objects
- ▶ We should not enter any building even after the earthquake stops. There is always the danger of damage portions falling later.


Q6. What does the government do when a disaster strikes?



1. The Indian Armed forces are trained to help in difficult situations
2. They drop food packets, clothes, water packers and medicines in the affected areas.
3. The red cross society supplies urgent medical relief.
4. NCC help the people affected at the disaster sites
5. FAO, ILO, WHO and NGOS also help at the time of a disaster.

Q7. How should one deal with a disaster?

- Keep important phone numbers
- Keep a bag that contains a torch, a pair of clothes and non perishable food items always ready.
- Be aware of the kind of disaster your area is prone to
- When a disaster strikes pick up your emergency bag, switch off all the electric points and move out of the house as soon as possible
- Avoid using elevators
- Encourage people to face the situation bravely
- Encourage people around you to help by cash and in kind



Q8. What is Cyclone?

Cyclones are strong and rotating winds common in coastal areas and are associated with high tides and floods.




Q9. What is Landslide?



Landslide are common in hilly region. They occur when slippery masses of rock, earth and debris slide down the mountain slope due to heavy rain fall or earth quake.

Q10. What is Flood? Due to heavy rain, rivers become spread out on the land around them. This event in nature is called flood.



Q11. What is Tsunami?

A Tsunami is an enormous wall of water that comes on to the shore in the form of waves. Tsunami occurs due to undersea earthquakes or volcanic eruptions.



Q12. What is Drought?




If a particular area receives no rain or less rain than normal for a long period, it is said to be affected by drought. Due to drought water sources dry up and no crop can survive. People die of famine.

Q13. Describe Volcanic Eruption.



A Volcano is a hill with a vent. The vent reaches down to the hot molten rock beneath the surface of the earth. During a volcanic eruption the molten rock is forced up the vent. It flows out of the top as Lava. The Lava flows out very fast and burns everything that comes in its way. It causes great damage to property and life.


Q14. What is called forest fire?



Sometimes a fire breaks out in a forest due to lightning or due to dry leaves and twigs rubbing against one another. This is called forest fire.

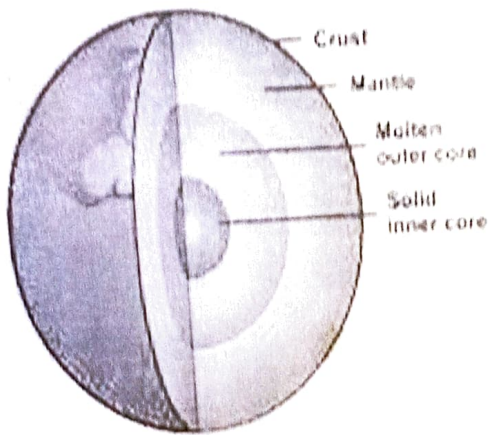
Q15. How is the intensity of an earth quake measured?

The intensity of an earthquake is measured on Richter Scale using Seismograph.

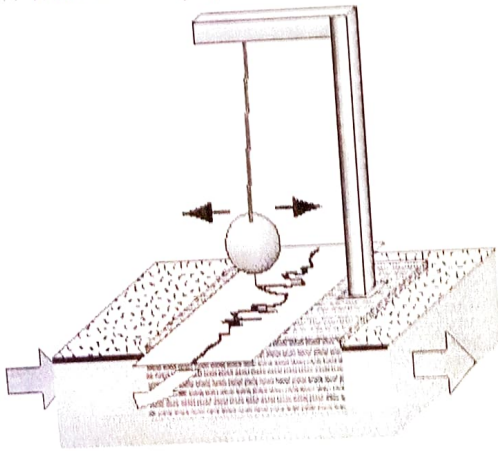


Q16. Draw and label the cross section of earth

Cross Section of the Earth



Q17. What is seismograph?



Kendriya Vidyalaya DPS Kishtwar

Winter Vacation Holiday Homework

Class -5

Subject - Mathematics

1. Learn tables from 10 to 20.

2. Find the length and breadth of Indian currencies.

Currencies	Length	Breadth
10 Rupee note		
20 Rupee note		
50 Rupee note		
100 Rupee note		
200 Rupee note		
500 Rupee note		

3. OBSERVE A BIRD (ANYONE LIKE CROW) FOR 5 DAYS. RECORD THE DATA AND ANALYSE.

DAYS/DATE	NO. OF CROWS
DAY 1	

DAY 2	
DAY 3	
DAY 4	
DAY 5	

- a) Total number of birds observed in 5 days. _____
- b) On which day, least number of birds are observed. _____
- c) On which day, most number of birds are observed. _____.
- d) Add the number of birds observed on Day 2 and Day 5.

4. Solve the given worksheet.

WORKSHEET

10. TENTHS AND HUNDREDS

CLASS: V _____

Roll No _____

Name: _____

Date _____

1. Answer the following questions:

1. Complete the table by writing the place and place value of the underlined digits.

Number	Place	Place value
75.50 <u>1</u>		
<u>9</u> 46.7		
43.0 <u>6</u> 4		
780. <u>2</u> 15		
<u>9</u> 78.03		

2. Do them correctly.

a. $2.750 \times 100 =$ _____

b. $0.4695 \times 1000 =$ _____

c. $23.45 \times 10 =$ _____

d. $15.56 \div 10 =$ _____

e. $5647.58 \div 1000 =$ _____

f. $913.4 \div 100 =$ _____

3. Compare the decimal numbers ($<$, $>$, $=$)

a. 5.12 _____ 6.12

b. 7.56 _____ 7.54

c. 1.2×10 _____ 0.12×100

d. $3\frac{5}{100}$ _____ $3\frac{5}{10}$

e. $4 + \frac{9}{10} + \frac{3}{100}$ _____ 4.93

4. Write each of the following using decimals.

a. 15 m 60 cm = _____ b. 35 ml = _____ c. 6 km 78 m = _____ d. 3560 paise = _____

5. Write the following as decimals

a. Ninety three decimal zero four = _____ b. Seven tenths = _____

c. Fifteen point two three four = _____

6. Write the decimal number.

a. $500 + 10 + 3 + \frac{6}{10} + \frac{7}{100}$

= _____

b. $9 + \frac{7}{100}$

= _____

7. Arrange in ascending order: 7.012, 7.102, 7.201, 7.210

8. Arrange in descending order: 19.16, 1.916, 191.6, 19.61

9. Solve the following:

a) $6.917 + 18.43$

b) $15.16 + 234.04 + 9.6$

c) $245.16 - 23.5$

d) $64.980 - 9.745$

e) 21.34×8

f) 137×2.3

10. Each sheet of metal is 0.5 inches thick. If Dustin stack 20 sheets on top of each other, how thick will the stack be?

11. Anita walked 0.2 miles to the park. Then she walked another 0.2 miles to a cafe. How far did Anita walk in all?

Sub Tr. - Indirect

केंद्रीय विद्यालय किशतवाड़

कक्षा 5 A, B

शरदकालीन अवकाश गृह कार्य

विषय हिंदी

एक कहानी पढ़कर व लिखकर निम्न प्रश्नों के उत्तर दो

कहानी का नाम

लेखक का नाम

पब्लिशर का नाम

किताब का मूल्य

कहानी के मुख्य पात्रों का नाम

किताब का मूल्य

कहानी से मिली शिक्षा

अपनी पुस्तक में से एक सुंदर कविता चार्ट पर लिखो व उस कविता से संबंधित चित्र भी बनाएं

हर सप्ताह के मुख्य समाचार अपनी कॉपी में लिखें

अपनी किताब में से 50-50 उपसर्ग व प्रत्यय के उदाहरण लिखें

अपनी पाठ्य पुस्तक में से सर्वनाम से संबंधित वाक्य के उदाहरण लिखे व सर्वनाम को रेखांकित करें

बिना मास्क घर पर आना मना है एक कागज पर लिखकर अपने दरवाजे पर चिपकाए व मास्क से संबंधित एक चित्र भी बनाएं

विषय अध्यापक तिलक राज

केंद्रीय विद्यालय किशतवाड़ कक्षा 3 विषय हिंदी शरदकालीन अवकाश गृह कार्य

- अपनी पुस्तक में से एक सुंदर कविता चार्ट पर लिखो व उस कविता से संबंधित चित्र भी बनाएं कोई भी कविता आप अपनी इच्छा से बना सकते हैं।
- 20 पेज सुलेख लिखें।
- 10 मुहावरे लिखे व उनका अर्थ भी लिखें।
- 20 विलोम शब्द लिखें।
- 20 पर्यायवाची शब्द लिखें।

विषय अध्यापक तिलक राज

KENDRIYA VIDYALAYA DPS KISHTWAR
CLASS - 5
SUBJECT - ENGLISH
WINTER BREAK HOMEWORK (2021-2022)

1. Read the following chapters:-
 - Sing a song of people.
 - Around the world.then find out any 20 action words (verbs), write their meaning and make sentences.
2. Write the difference between city life and village life. (Any five difference)
3. Make a chart of noun and pronoun and its type with examples.
4. Draw the picture and write conversation between Malu and Bhalu.

TEACHER :- SHIWANI (PRT)

KENDRIYA VIDYALAYA, KISHTWAR

Winter vacation's homework for class III

MATHEMATICS:

- 1) Read and write tables from 1 to 20 and write them 3 times in your notebook.
- 2) Prepare a model of clock using sheet, cardboard or any hard material available to you.
- 3). How much Litre , you will add to make it equal to 1 Litre ? (1litre= 1000millilitre)
 - (a) $400\text{ml} + \underline{\hspace{2cm}} = 1000\text{ml}$
 - (b) $800\text{ml} + \underline{\hspace{2cm}} = 1000\text{ml}$
 - (c) $500\text{ml} + \underline{\hspace{2cm}} = 1000\text{ml}$
- 4). Convert following into millilitre(ml):-
 - (a) $7\text{ l} = \underline{\hspace{2cm}}\text{ ml}$
 - (b) $10\text{ l} = \underline{\hspace{2cm}}\text{ ml}$
 - (c) $9\text{ l} = \underline{\hspace{2cm}}\text{ ml}$
- 5). Practice 2 question daily of multiplication , addition , subtraction , and Division with two digits ?
- 6). Read the given data and answer the following questions :-

Favourite Food	No. Of Students
Ice- cream	6
Pizzas	4
Burgers	8
Finger Chips	10
Sandwiches	5

- (a) Which food is liked most _____
- (b) Which food is liked the least _____
- (c) How many children like ice-cream _____
- 7) Do any five word problems of multiplication, addition and subtraction with your own.

Name - Santosh Kumar Meena