


KV KISHTWAR
SUMMER VACATION HOMEWOK
CLASS - III
SUBJECT - EVS

1. Draw a poster on 'Save Water' and write 5 sentences how we can save water.
2. Draw 5 water sources and write their names.
3. Write 10 plants and trees names.
4. Collect 5 different types of flowers ,paste them in your notebook and write their names.
5. Write a short poem on water and learn it.
6. Revise all the class work and learn.

SUBJECT TEACHER TILAK RAJ AND NISHA


Tilak
Raj

KENDRIYA VIDYALAYA DPS KISHTWAR

HOLIDAYS HOMEWORK

SUMMER BREAK (2022-23)

Class – II

Subject – Mathematics

1. Learn and write tables from 2 to 7.
2. Learn number names from 1 – 100.
3. Read, learn and write number names from 101 to 150.
4. Make a model of Abacus to show various 2 digits numbers .
- 5.
6. Make a measuring balance & measure various things as heavy and light.
(You can measure things like flowers, pen, pencil, ball, chocolate, book etc.)

And write 5 things that are heavy and 5 things that are light in weight.

S. No.	Heavy	Light
1.		
2.		
3.		
4.		
5.		


Note – Write in maths classwork.

NAME - CHANCHAL
(PRT)
Chanchal
13/5/22

केंद्रीय विद्यालय किशतवाड़
ग्रीष्मकालीन अवकाश कार्य
कक्षा चौथी
विषय हिन्दी

- 1 बीस विलोम व समानार्थी शब्द लिखें ।
- 2 हिन्दी भाषा में सभी महीनों के नाम क्रम में लिखें और याद करें ।
- 3 कोई भी एक कविता का सुंदर चार्ट बनाओ।
- 4 कक्षा में। पढ़ाए गए सभी पाठों को दोहराना व याद करना।

विषय अध्यापक तिलक राज



Kendriya Vidyalaya Kishtvar

Class -4

English holiday homework

1. Read English newspaper daily, choose 5 words and find out their meaning from the dictionary.
2. Write 2 pages of hand writing daily.
3. " Though Akash was from a good city still he decided to work in a village ". If you had a choice would you live in a city or a village. Justify your answer.
4. Write the poem 'noses' and 'wake up' in your holiday homework notebook and highlight or underline all the nouns ,pronouns and degrees of comparison.
5. Make a family tree also paste photographs on it.



SANJEEV SINGH DAHIYA

Summer vacation homework

Class- IV

Subject- Maths

Subject teacher- Santosh Meena

- 1. Write and learn multiplication tables from 2-20.**

- 2. Do 10-10 questions each for
Addition
Subtraction
Multiplication
Division.**

- 3. Revise chapter 1, chapter 2 and all questions.**

- 4. Make a paper scale of 20 cm.**

- 5. Make a brick using cardboard and measure its
(a) length
(b) breadth
(c) height**

- 6. Make any two floor patterns using colour paper.**

- 7. Write all odd and even numbers upto 100.**

- 8. Take 10 different 6 digit numbers and write them in expanded form.**

Summer vacation homework

Class- IV

Subject- Maths

Subject teacher- Santosh Meena

9. Write the characteristics/Properties of:

- (a) A Rectangle**
- (b) A Square**
- (c) A Triangle**
- (d) A Cuboid**
- (e) A Cube**

Draw and colour the figures.

Santosh meena

KENDRIYA VIDYALAYA KISHITWAR
Summer Vacations (2022-2023)
(17.05.2022 to 26.05.2022)

EVS HOLIDAYS HOMEWORK
CLASS IV

- ⊙ Read Chapter 1, 2, 3 of your textbook.
- ⊙ Using dry leaves make pictures of different animals in a scrap file.
- ⊙ Draw a picture of a plant and label its parts in a scrap file.
- ⊙ Prepare different types of Masks
 - Sun
 - Animal (Any two)
 - Flower (Only one)
- ⊙ Prepare models of (any two)
 - Sun
 - Moon
 - Cloud
 - Tree
 - Boat
- ⊙ Draw the diagram of balanced diet in scrap file.

WORK ASSIGNED BY
SEEMA
PRT

Kendriya Vidyalaya Kishtvar

Class 3


English holiday home work

1. Learn and recite poem 'good morning' and 'bird's talk'.
2. Write two pages of handwriting daily.
3. Read chapter 'Nina and the baby sparrow' find out the meaning of new words and use them in sentences.
4. Imagine you have a big garden. What would it look like. Draw a picture.


SANJEEV SINGH DAHIYA

KENDRIYA VIDYALAYA KISHTWAR
HOLIDAYS HOMEWORK (2022-23)
CLASS : III SUBJECT: MATHS

1. Learn and write table from 2 to 10.
2. Learn and write counting from 1 to 500.
3. Find place value of each digit :-
i) 345 ii) 201 iii) 679
- 4) Write in expanded form:-
i) 23 :-
ii) 145:-
iii) 6801:-
- 5) Write in short form :-
i) $60 + 7 =$
ii) $400 + 60 + 1 =$
iii) $5000 + 700 + 90 + 2$
- 6) Write smallest and greatest number by using given number :-
i) 4,5,2,0 ii) 2,7,5,3,1
Smallest number :.....
Greatest number :.....
- 7) Write 2 digit smallest number ?
- 8) Write 5 digit greatest number ?
- 9) Draw the other half of the following :-



10) Solve the word puzzle and match with correct answer :

Who am I? Match with the number.

- | | |
|--|-----|
| a) I come between 40 and 50 and there is a 5 in my name. | 96 |
| b) I have 9 in my name and am very close to 90. | 150 |
| c) If you hit a 4 after me, you score a century. | 45 |
| d) I am equal to ten notes of 10. | 89 |
| e) I am century + half century | 87 |
| f) I am exactly in between 77 and 97. | 100 |

Subject Teacher : *ysh*
13/05/2022

KENDRIYA VIDYALAYA KISHTWAR
HOLIDAYS HOMEWORK (2022-23)
CLASS : V SUBJECT: EVS

- 1) Read ch- 1 & 2 and learn their q/ans.
- 2) Make a puppet of an animal using waste material.
- 3) Make a poster on "Project Tiger " programme launched by government of India.
- 4) Draw an Indian map and mark the following states with the name of names of tiger reserves.

1. Ranthambore Tiger Reserve - Rajasthan

2. Kanha Tiger Reserve - Madhya Pradesh

3. Sunderban Tiger Reserve - West Bengal

4. Jim Corbett National Park - Uttrakhand

5. Ghana National Park - Rajasthan

5) Match the following :-

Like snake charmers, there are many communities who use animals for their livelihood.

- (i) Match the animal with the purpose they are used for.

	Animals		Uses
(i)	Cow	(a)	carries load
(ii)	Horse	(b)	gives us eggs
(iii)	Hen	(c)	gives us wool
(iv)	Sheep	(d)	source of food
(v)	Fish	(e)	gives us milk

Subject teacher Pandey
13/05/2022

केन्द्रीय विद्यालय किशतवाड़

ग्रीष्मकालीन अवकाश (मई 14.05.2022-26.05.2022)

कक्षा तृतीय

विषय - हिंदी

प्रश्न 1 मात्राओं का ध्यान रखते हुए प्रतिदिन एक सुलेख लिखें ।

प्रश्न 2 अपने प्रिय पक्षी का चित्र बनाकर पाँच वाक्य लिखें ।

प्रश्न 3 अपने प्रिय पशु का चित्र बनाकर पाँच वाक्य लिखें ।

प्रश्न 4 कक्कू कविता और शेखीबाज मक्खी कहानी में से करवाया गया अभ्यास कार्य कंठस्थ करें।

प्रश्न 5 पठन (reading) का अभ्यास करें। स्वस्थ एवं सुरक्षित रहें।

प्रियता शर्मा
प्राथमिक अध्यापिका
केन्द्रीय विद्यालय किशतवाड़

KV DPS KISHTWAR
Holiday's Homework – MAY 2022
Evs- 2 A&B

1. Learn all the work from notebook.
2. Make a scrapbook by drawing pictures of
 - a. body parts
 - b. sense organs
 - c. yoga exercises
 - d. parts of plants
 - e. different types of plants.
3. Write your daily routine.
4. Complete the EVS notebook. (only for newly admitted students)

Note- Write holiday's homework (i.e. NO. 1,3,4) in EVS notebook.

Indrajeet
13/05/2022
INDERJEET

गृह कार्य हिंदी :-

कक्षा दूसरी अनुभाग अ + व

केंद्रीय विद्यालय किशतवाड़

ग्रीष्मकालीन अवकाश मई 2022

- 1) पांच पन्ने सुलेख के लिखो ।
- 2) पांच पालतू जानवरों के नाम लिखो ।
- 3) पांच जंगली जानवरों के नाम लिखो ।
- 4) पांच फलों के नाम लिखो ।
- 5) पांच फूलों के नाम लिखो ।

विषय अध्यापक

1. श्रीमती श्यामा शर्मा :- श्रीमती शर्मा
2. श्री शैलेश कुमार :- श्री शैलेश कुमार

केंद्रीय विद्यालय किशतवाड़

ग्रीष्मकालीन गृह कार्य

कक्षा- 5.

विषय- हिंदी

1. रोज़ एक सुलेख लिखो।
2. पाठ- राख की रस्सी से खिलौने वाला कविता तक पढ़ो व याद करो।
3. आपने ग्रीष्मावकाश कैसे व्यतीत किया, संक्षेप में बताओ।
4. अपने मनपसंद त्योहार का चित्र बनाओ व उसमें रंग भरें।
5. अभी तक पढ़ाए गए सभी पाठों के कठिन शब्द छांट कर पांच बार लिखो।

अध्यापिका - निशा

Nisha

Math Holiday Homework

(Summer vacation)

CLASS -V

Sub- match
C.F - Samtsh meene

1. Learn and write tables 2 to 20 . (two times)
2. Revise chapter 1 and 2 work done till now.
3. Do 2 sums of addition , subtraction , multiplication and division daily .
4. Make a degree clock with the help of activity given on page 31.
5. Do "Surya Namaskar" yoga daily. Draw all the positions on A-4 sheet and count the number of angles made by your body during it .
6. With the help of matchsticks make different types of shapes on A-4 sheet and mark angles with different colors -
 - a) More than 90 degree
 - b) Less than 90 degree
 - c) Right angle
7. Count angles in your name -
 - a) Right angles
 - b) More than right angle
 - c) Less than right angle

Samtsh meene

9/05/22

KENDRIYA VIDYALAYA KISHIWAR

ENGLISH TEST CLASS V (SESSION 2022-2023)

Maximum Marks: 10

Q1. Write the meaning of the following words. ($1/2$ Mark $\times 4 = 2$)
a) Baton b) Sternly c) Beneath d) Hoop

Q2. What were the preparations in the palace for? (1 Mark)

Q3. Write any five ingredients of 'AVIAL'. (1 Mark)

Q4. What are some of the different sounds you hear when the Ice-Cream man comes? (1 Mark)

Q5. Name the different flavours of ice cream, the ice-cream man has in his cart? (1 Mark)

Q6. Choose the correct spelling. (1 Mark)

a) Tradittional

b) Traditional

c) Tradicional

d) Traditeonal

Q7. The Opposite Word for 'ABOVE' is _____ (1 Mark)

a) BORE

b) CHILD

c) BELOW

d) ANGEL

Q8. State whether the following are true or false. ($2 \times 1 = 2$)

i) The king had ordered a dinner in the palace. _____

ii) The cook had planned to make soup using the vegetable Scraps. _____